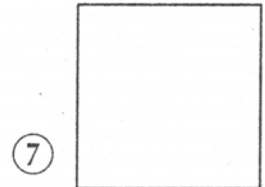
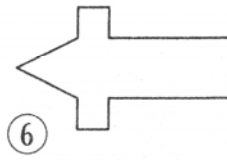
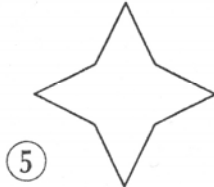
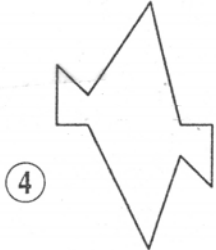
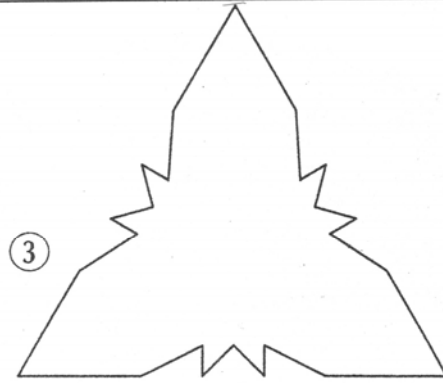
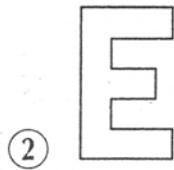
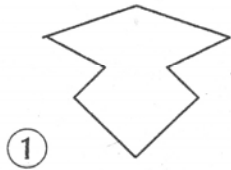
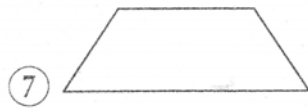
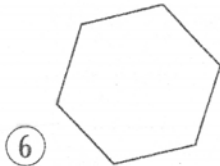
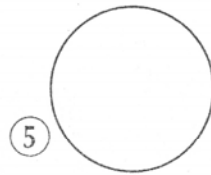
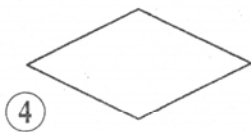
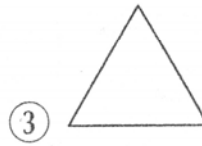
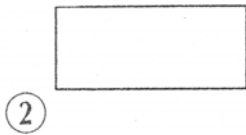
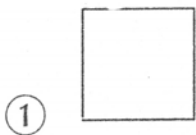


Trace le ou les axes de symétrie des figures, quand c'est possible.



Trace le ou les axes de symétrie des figures suivantes, puis complète le tableau.



	Figures
1 axe de symétrie	⑦
2 axes de symétrie	
3 axes de symétrie	
4 axes de symétrie	
Plus de 4 axes de symétrie	

Complète les figures en traçant leur symétrique par rapport à l'axe ou aux axes de symétrie tracés en pointillés.

